

SLSDAV PUBLIC SCHOOL, MAUSAM VIHAR
SUMMER HOLIDAY HOMEWORK ASSIGNMENT
CLASS:IV SUBJECT:ENGLISH
TOPIC- Chapter - A true friend

Note : DO THE FOLLOWING QUESTIONS IN ENGLISH NOTEBOOK IN BEAUTIFUL HANDWRITING.

GRADE – 4	SUBJECT - ENGLISH	TOPIC – A True Friend
-----------	-------------------	-----------------------

Worksheet - Vocabulary Building.

The students will work with the vocabulary sheet in the following way.

*Read the words in the circle.

*Read the sentences in the lesson that uses the word.

*With the help of the dictionary and the line in the lesson:-

- Write its meaning
- Write its Antonym/Synonym
- Frame a sentence using that word.

Meaning Antonym	
<div style="border: 1px solid black; border-radius: 50%; width: 60px; height: 30px; margin: 0 auto; display: flex; align-items: center; justify-content: center;">Betray</div>	
Sentence	

Meaning	Synonym
<div style="border: 1px solid black; border-radius: 50%; width: 60px; height: 30px; margin: 0 auto; display: flex; align-items: center; justify-content: center;">Determine</div>	
Sentence	

Meaning	Antonym
<div style="border: 1px solid black; border-radius: 50%; width: 60px; height: 30px; margin: 0 auto; display: flex; align-items: center; justify-content: center;">Secure</div>	
Sentence	

Meaning	Synonym
<div style="border: 1px solid black; border-radius: 50%; width: 60px; height: 30px; margin: 0 auto; display: flex; align-items: center; justify-content: center;">Deserve</div>	
Sentence	



GRADE – 4	SUBJECT – ENGLISH	TOPIC – A True Friend
-----------	-------------------	-----------------------

The students will be given a crossword to solve from the events in the story and further they will fill in the blanks with the appropriate answer.

E	B	R	T	I	L	N	H	U
G	O	O	D	O	P	K	J	I
D	C	E	F	S	M	A	L	L
C	V	X	B	M	Y	R	S	Q
E	Q	W	A	N	T	E	D	B
Q	B	A	W	V	E	T	P	C
P	O	O	R	G	D	U	O	D
R	F	R	T	U	Z	S	I	F
M	L	J	E	A	L	O	U	S
K	M	E	B	V	Z	X	E	R

Rahul was _____ in games but was _____ in studies. Raj was good at both. They both were best friends. But Rahul felt _____ of Raj as he was good in both. Sports Day was near and

Rahul _____ to win the race. So, he dug a _____ pit and cheated his best friend by hurting him.



एस.एल.एस.डी.ए.वी.पब्लिक स्कूल,मौसम विहार,दिल्ली-110051
कक्षा -IV हिंदी कार्याभ्यास नाम - _____

नोट-इस कार्याभ्यास का लिखित अभ्यास अपनी नोटबुक(A4 SIZE) में साफ़ व सुंदर लिखावट में करेंगे।

प्रश्न 1.वर्ग पहेली में से पाँच- पाँच व्यक्तिवाचक, जातिवाचक तथा भाववाचक संज्ञा शब्द लिखिए-

त	कु	द	या	अ	स	म	शे	र
ज	तु	का	य	र	ता	म		ह
म	ब	से	वा	ब	च	प	न	रि
ह	मी	न	दी	सा	ना	च		या
ल	ना	मि	जं	ग	ल	स	प्रे	णा
ह	र	त्र	ह	र	धि	च	म	रु

प्रश्न 2 . सही विकल्प चुनकर लिखिए-

- हवा महल - महल स्मारक मंदिर
- कावेरी - शहर गाँव नदी
- दैनिक भास्कर - पत्रिका उपन्यास समाचार पत्र
- सान्या मिर्ज़ा - अभिनेता खिलाड़ी लेखक
- अरुणाचल प्रदेश - राज्य देश नगर
- अगस्त - सप्ताह दिन महीना
- होली - कहानी दिशा त्योहार
- नंदा देवी - पर्वत गाँव पुस्तक
- शान ए पंजाब - शहर रेलगाड़ी समुद्र
- कुरान- धार्मिक ग्रंथ पाठ्यक्रम पुस्तक बाल पत्रिका

प्रश्न 3. किसी भी बाल पत्रिका में से कोई चार कहानियाँ पढ़िए और निम्न तालिका को पूर्ण कीजिए -
कहानी का नाम - _____

व्यक्ति /प्राणी/पेड़ - पौधे	वस्तु	स्थान	भाव

प्रश्न 4. संज्ञा व भेदों को दर्शाते हुए एक सुंदर सा रंगीन चित्र बनाइए | आप घर पर उपलब्ध सामान का प्रयोग कीजिए |

उदहारण - जैसे कोई गाँव का दृश्य बनाइए तथा उसमें संज्ञा शब्द व उसके भेद को अलग रंग से लिखिए | (आप ऐसे किसी भी दृश्य का चित्र बना सकते हैं तथा हस्तकला का प्रयोग भी कर सकते हैं |)

एस.एल.एस.डी.ए.वी.पब्लिक स्कूल,मौसम विहार,दिल्ली-110051
कक्षा -IV हिंदी कार्याभ्यास नाम - _____

नोट-इस कार्याभ्यास का लिखित अभ्यास अपनी नोटबुक(A4 SIZE) में साफ़ व सुंदर लिखावट में करेंगे।

पाठ 1 फैलती चप्पलें + पाठ 2 - उलटा - पुलटा

प्रश्न 1. दिए गए शब्दों के समान लय वाले शब्द लिखिए -

- (1) छत - _____
- (2) आप - _____
- (3) झटपट - _____
- (4) बंदर - _____
- (5) जोड़ी - _____

प्रश्न 2.- पाठ फैलती चप्पलें में चप्पल शब्द में प वर्ण का प्रयोग आधे व पूर्ण रूप में हुआ है, इन्हें दवित्व व्यंजन(जब एक व्यंजन का प्रयोग पहले आधे रूप में और फिर उसी को पूर्ण रूप में प्रयोग किया जाता है) कहते हैं। नीचे दिए गये दवित्व व्यंजनों का प्रयोग करते हुए तीन - तीन शब्द लिखिए -

- क्क - _____
गग - _____
च्च - _____
ज्ज - _____
ल्ल - _____
न्न - _____
प्प - _____
ब्ब - _____
स्स - _____
म्म - _____

प्रश्न 3 . दिए गए शब्दों में छिपे शब्द ढूँढकर लिखिए -

(उदाहरण- दुकान - कान)

सुधार - _____ विचार - _____ शिक्षण - _____

प्रक्रिया - _____ मानवता - _____ विशेषज्ञ - _____

प्रदान - _____ उपयोगी - _____ अधिकारी - _____

(आप इस प्रकार के और भी शब्द ढूँढकर लिख सकते हैं।)

S.L.S.D.A.V. PUBLIC SCHOOL MAUSAM VIHAR
MATHEMATICS, CLASS-IV, WORKSHEET-1, HHW

Q1. Write the following numerals in words.

- a) 2345
- b) 1078
- c) 2019
- d) 12309
- e) 45279

Q2. Write numeral for the following.

- a) Four thousand forty-one.
- b) Six lakh five thousand nine.
- c) Two thousand two.
- d) Five lakh three thousand nine.
- e) Six thousand sixty.

Q3. Write period, place and place value of highlighted digit.

- a) 4035
- b) 14289
- c) 7653
- d) 4103

Q4. Write a short story using the following mathematical terms. Also draw and colour a picture for your story.

Rupees thousands, hundreds, tens, metre, square, rectangle etc.

(You can use more mathematical terms of your choice. You can also skip some words given above.)

S.L.S.D.A.V. PUBLIC SCHOOL MAUSAM VIHAR
MATHEMATICS, CLASS-IV, WORKSHEET-2,
HHW

Q1. Write the smallest 4-digit number.

Q2. Write the greatest 4-digit number.

Q3. Find the difference between smallest 4-digit number and greatest 3-digit number.

Q4. True/False

a) Smallest 5-digit number is successor of greatest 4 digit number.

b) Predecessor of largest 4 digit number is smallest three digit number.

Q5. Find the sum

a) 2342; 345 ; 567

b) 308; 8769

c) 3098; 765; 3214

d) 3087; 12345

e) 2154; 4325

f)305; 564; 9087

g)2130; 564; 103

Q6.Find the difference

a) 4000-3990

b)3564-3784

Q7.Subtract smallest 3-digit number formed by the digits 4,3,7 from 1000.

Q8.Multiply and find the product.

a) 32x 4

b)37x7

c)123x 45

d)654x 43

e)780x 21

f)940X 23

g)784x30

h)1523x2

i)3621x3



j)9182x1

S.L.S.D.A.V. PUBLIC SCHOOL MAUSAM
VIHAR


MATHEMATICS, CLASS-IV, WORKSHEET-3,
HHW

Q1.The ____ colours of rainbow multiplied with ____months of a year gives us 84.

Q2.The number of corners in a circle ____ multiplied with any number gives us zero.

Q3.The number of sun ____ multiplied with any number gives us number itself.

Q4.Circle the odd one



Q5.Write next three numbers-

a) 2,4,6,8, _____, _____, _____

b) 1,3,5,7, _____, _____, _____

c) 5,10,15,20, _____, _____, _____

d) 1,4,9,25, _____, _____, _____



e) 100,97,94,91,____,____,____

f) 256,128,64,32,____,____,____

g) 15,30,45,60,____,____,____

Q6.Neha is celebrating her seventh birthday.Three years ago, her brother was 3 years older than her.What is the present age of her brother.

Q7.Complete the following

a) East:West :: North:_____

b) Up:Down :: ____ : Right

c)Increase:Decrease :: _____:Predecessor

d) Addition:_____::Multiplication:Division

Q8.Radhika is playing a game in her phone , She moves 5m to her left and then goes 4m to her right. Then she returns back to starting point. Which shape will you get in this situation?

a) Rectangle

b) Triangle

c)Circle

d) Square



SLS DAV PUBLIC SCHOOL, MAUSAM VIHAR, DELHI-51
CLASS-IV/SUBJECT-SCIENCE (CH-Safe Handling and Storage of Water)
WORKSHEET 1.

1. Identify the method of purification of water-

a. Adding a small amount of chlorine in water.

b. It removes dust and other suspended particles from water.-

2. Give reasons-

a. We should purify water before drinking it.

b. We should change water in coolers and flower pots after every 3-4 days.

3. Answer the following questions-

a. Is water filtered through a cloth is suitable for drinking? _____

b. The water filtered through the cloth is not suitable to drink because it contains

- _____
- i. Dust
 - ii. Germs
 - iii. Dust and germs both

c. What can you add to this water to further purify it which also removes the germs?

d. Write the name of the process you will use in the above question.

_____ 4. Select the

correct option for the following questions-

a. Drinking unclean water may cause _____

- a. Jaundice
- b. Malaria
- c. Dengue

b. Which of the following practice is not safe for us?

- a. Store water in clean and covered container
- b. Drink water that has been stored for many days.
- c. Use ladle to take out water from a container.

c. ----- is added in the water in the process of chlorination.

- a. Oxygen

b. Zinc

c. Chlorine

d. Water helps in removal of _____ from the body.

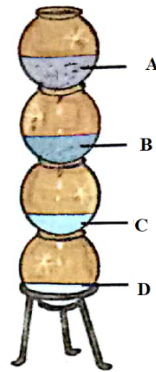
a. Nutrients

b. Waste

c. Carbon dioxide



Q.1 Identify the type of filter shown in image. Also label its part.



Q.2 State the reason for given statements-

1. We should never dip hands in drinking water
2. Water should not be allowed to stagnate around.

Q3. Can we use ground water as potable water? Why ?

Q4. Which according to you is the best method of purification of water and why?

Q5. Observe the picture shown below and answer the following questions-



- a) Is the practice of safe handling of water depicted in the picture?
- b) List any two practices to safe handle water at our homes.

Q4. Identify the following-

- a) A method of removing dust and other particles from water using filters.
- b) Two diseases caused by drinking unclean water
- c) Two methods of purification of water that can only remove germs

SOCIAL SCIENCE HOLIDAY HOMEWORK

Worksheet-1

a) Look at the given picture carefully and identify the members of Angad's family. Write down their name and relation with Angad's father in the given table.




a)



b)



c)



d)

Name of the member	Relationship with his father
a)	



b)	
c)	
d)	

Worksheet-2

Let's talk more about family relations:

Different members of our family live in different states/countries. Each state/country has its own food speciality, dresses, famous tourists' attractions. So, let's find out more about them.

Fill in the following particulars of the following relations in your family.

Your mother's sister, Your Father's father, Your maternal uncle, Your mother's paternal aunt, Your father's maternal uncle.

Name of the member	Name of the relation you share with him/her.	State/country	Food speciality	Dresses	Famous attractions

Q-3) Let's think:

“Change is the law of nature.”

► On this note, elaborate on the changing family system in India.

Worksheet:3

We are presently staying indoors and following all safety measures to keep ourselves safe. Age-old home remedies and yogic asanas are helping us to fight the disease. Jatin is a young boy studying in class 4. His teachers and parents have told him to follow certain measures and stay at home. He follows few of them. You are his elder brother/sister. Check out his habits and guide him to follow the safety measures and stay safe during this challenging times.

a) Following are the few things which you have observed Jatin doing. Tick the good habits and cross the bad habits.

1. Coughs /sneezes into his elbow or tissue. _____
2. Gets lots of sleep. _____
3. Touches his face. _____
4. Eats healthy food. _____
5. Goes out for picnic when suffering from cough. _____
6. Shakes hands. _____
7. Shares his drink with my friends. _____



8. Eats chocolate before washing his hands. _____

b) Lockdown has proved very effective in fighting the Covid-19 virus. Since last year, we all are staying indoors and spending quality time with our family. Describe various aspects of your quarantine life in a paragraph. (50-60 words)

World Environment Day

The environment provides us with essential resources to sustain life on Earth. All living things, including water, air, soil, and vegetation form the environment. It is a home for many living species and maintains the balance in the ecosystem. However, there has been an increase in the contamination and pollution of these precious resources, Trees cut down; soil erosion occurs, water bodies, and the air filled with pollutants, which affect not only us but all living beings around us.

It is essential to spread awareness and preserve such resources for the present and future generations.

World Environment Day (WED) is on such an initiative to spread awareness about the conservation and preservation of the environment. Celebrated on June 5th every year, people from all places take part in doing their bit for the environment. World Environment Day is an initiative started by the United Nations as a part of the UN Environment Programme.

Let us enhance our knowledge about environment.

A. Multiple choice questions-

1. The first World Environment Day was held in which year?

- A. 1971
- B. 1974
- C. 1976
- D. 1978

Ans. B

Explanation: Since 1974, World Environment Day has been celebrated every year on 5 June.

2. What was the theme of World Environment Day 2020?

- A. Air Pollution
- B. Seven Billion People. One Planet. Consume with Care.
- C. Raise Your Voice Not the Sea Level
- D. Biodiversity

Ans. D

Explanation: The theme of World Environment Day 2020 is Biodiversity. Air Pollution was 2019 theme, Seven Billion People. One Planet. Consume with Care was 2015 theme and Raise Your Voice Not the Sea Level was the theme of 2014.

3. Under which theme, India in 2018 hosted the celebration of World Environment Day?

- A. Beat Plastic Pollution
- B. I'm with nature



- C. Think.Eat.Save
- D. Green Economy: Does it Include You?

Ans. A

Explanation: The 45th celebration of World Environment Day was hosted in India under the theme "Beat Plastic Pollution". On this day around 6000 people gathered at Versova Beach in Mumbai to join UN Environment Champion of the Earth, Afroz Shah, in a beach to clean-up and collected over 90,000 kg of plastic.

4. When was the first major conference on environmental issues under the United Nations was held?

- A. 1970
- B. 1971
- C. 1972
- D. 1973

Ans. C

Explanation: The first major conference on environmental issues that was convened under the auspices of the United Nations was held in 1972 from 5-16 June in Stockholm, Sweden.

5. World Environment Day was celebrated for the first time under which slogan?

- A. Only One Future for Our Children
- B. Only One Earth
- C. A Tree for Peace
- D. Gift to the Earth

Ans. B

Explanation: World Environment Day was celebrated for the first time in 1974 under "Only One Earth" slogan.

6. First time Global 500 awards to environmental champions including Wangari Mathai were presented in which year?

- A. 1982
- B. 1985
- C. 1987
- D. 1989

Ans. C

Explanation: UN Environment Day was celebrated at the headquarters in Nairobi, Kenya, by presenting the first of its Global 500 awards to environmental champions including Wangari Maatahi in 1987. Through 2003, the awards become a backbone of World Environment Day celebrations.

7. What does UNEP stand for?

- A. United Nations Educational Plan
- B. United Nations Environmental Protection
- C. United Nations Environmental Programme



D. United Nations Environmental Policy

Answer – United Nations Environmental Programme

8. Name India's first national park

A. Manas National Park

B. Gir Forest National Park

C. Bandhavgarh National Park

D. Hailey National Park

Answer – Hailey National Park

9. PVC is a very toxic form of plastic. What is the full form of PVC?

A. Plastic vinyl compounds

B. Polymer vinyl chloride

C. Polyvinyl chloride

D. Polyvinyl camphor

Answer : Polyvinyl chloride

B. Answer the following in brief-

1. In which year the Environmental Protection Act was passed in India?

Answer – 1986

2. Which was the first national park of India?

Answer - Jim Corbett National Park

3. The only national park in India, where wild donkeys are found?

Answer- Gir National Park (Gujarat). It is also famous for Lions.

4. Where is the National Environmental Research Center of India located?

Answer - Nagpur

5. When did World Environment Day celebrate firstly?

Answer - 5 June 1974

6. Which gas absorbs Ultraviolet rays in the Atmosphere?

Answer - Ozone

